










Counting Money

Circle the correct answer.



<p>1.</p>  <p>1¢ 5¢ 10¢</p>	<p>2.</p>  <p>1¢ 5¢ 10¢</p>
<p>3.</p>  <p>1¢ 5¢ 10¢</p>	<p>4.</p>  <p>5¢ 6¢ 7¢</p>
<p>5.</p>  <p>10¢ 15¢ 20¢</p>	<p>6.</p>  <p>60¢ 50¢ 40¢</p>
<p>7.</p>  <p>26¢ 27¢ 28¢</p>	<p>8.</p>  <p>12¢ 17¢ 20¢</p>
<p>9. Jenny has 45¢. The chocolate bar she wants to buy is 85¢. How much more money does Jenny need?</p> <p>30¢ 35¢ 40¢</p>	
<p>10. Christopher has 50¢. Wendy has 45¢. How much money do they have in total?</p> <p>85¢ 95¢ 99¢</p>	