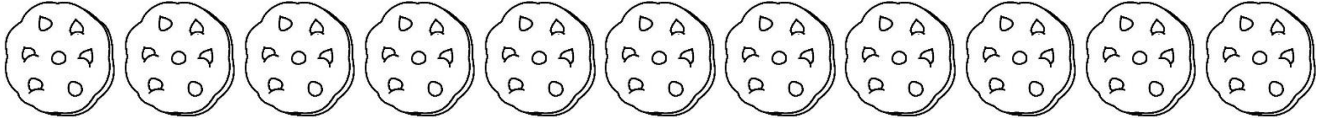


Practice your sweet math skills!

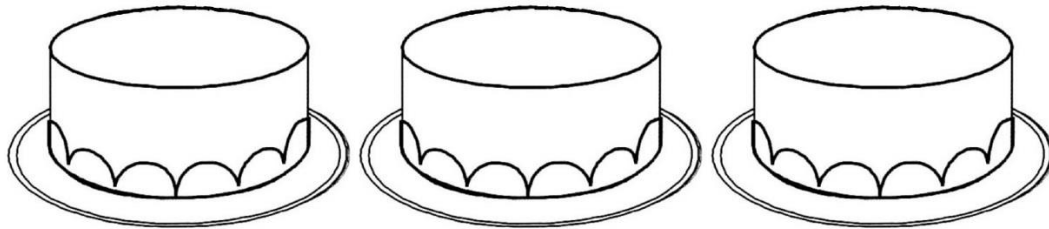
You work at a local bakery. Count how many of each of the sweets are left at the end of the day. Write the number on the line to complete the sentence.



There are _____ chocolate chip cookies.




There are _____ cupcakes.



There are _____ cakes.



There are _____ muffins.



There are _____ donuts.